

 **Take Assessment: Exam 4****Name** Exam 4**Instructions****Multiple Attempts** This Test allows 2 attempts. This is attempt number 1.**Force Completion** This Test can be saved and resumed later.▼ **Question Completion Status:****Question 1****5 points**[Save](#)

The loudness of a sound of intensity  $x$ , measured in watts per square meter, is defined as  $L(x) = \log\left(\frac{x}{x_0}\right)$ , where  $x_0 = 10^{-3}$ .

A company with loud machinery needs to cut its sound intensity to 26% of its original level. By how many decibels should the loudness be reduced?

- 5.850 decibels
- 6.880 decibels
- 6.237 decibels
- 5.760 decibels

**Question 2****5 points**[Save](#)**Solve the problem.**

The function  $D(h) = 5e^{-0.4h}$  can be used to determine the milligrams  $D$  of a certain drug in a patient's bloodstream  $h$  hours after the drug has been given. How many milligrams (to two decimals) will be present after 10 hours?

- 1.35 mg
- 3.22 mg
- 0.09 mg
- 272.99 mg

**Question 3****5 points**[Save](#)**Solve the problem.**

A thermometer reading  $9^\circ\text{C}$  is brought into a room with a constant temperature of  $30^\circ\text{C}$ . If the thermometer reads  $15^\circ\text{C}$  after 3 minutes, what will it read after being in the room for 6 minutes? Assume the cooling follows Newton's Law of Cooling:

$$U = T + (U_0 - T)e^{kt}$$

(Round your answer to two decimal places.)

- 19.29°C
- 2.04°C
- 27.21°C
- 40.71°C

**Question 4****5 points**[Save](#)

Decide whether the composite functions,  $f \circ g$  and  $g \circ f$ , are equal to  $x$ .

$$f(x) = x^3 + 7, g(x) = \sqrt[3]{x - 7}$$

- Yes, no
- No, yes
- No, no
- Yes, yes

**Question 5****5 points**[Save](#)

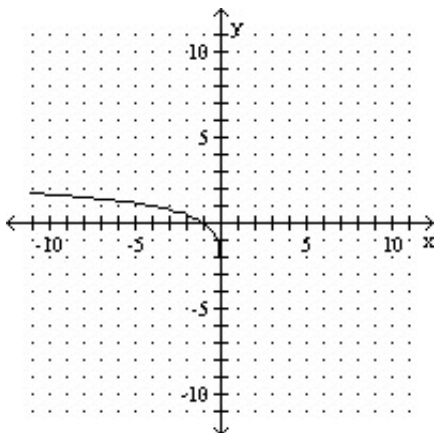
Solve the problem.

The half-life of a radioactive element is 130 days, but your sample will not be useful to you after 80% of the radioactive nuclei originally present have disintegrated. About how many days can you use the sample?

- 302
- 287
- 312
- 297

**Question 6****5 points**[Save](#)

The graph of a logarithmic function is shown. Select the function which matches the graph.



- $f(x) = \log_4 x$   
  $f(x) = \log_4(-x)$   
  $f(x) = -\log_4 x$   
  $f(x) = 1 - \log_4 x$

**Question 7****5 points**[Save](#)

The function  $f$  is one-to-one. Find its inverse.

$$f(x) = 3\sqrt{x+4}$$

- $f^{-1}(x) = x^3 + 16$   
  $f^{-1}(x) = x - 4$   
  $f^{-1}(x) = \frac{1}{x^3 - 4}$   
  $f^{-1}(x) = x^3 - 4$

**Question 8****5 points**[Save](#)

Find the indicated composite for the pair of functions.

$$(f \circ g)(x): f(x) = \sqrt{x+3}, g(x) = 8x - 7$$

- $8\sqrt{x-4}$   
  $8\sqrt{x+3} - 7$   
  $2\sqrt{2x+1}$   
  $2\sqrt{2x-1}$

**Question 9****5 points**[Save](#)

Solve the exponential equation. Express the solution set in terms of natural logarithms.

$$5^{3x} = 3.5$$

- $\left\{ \frac{\ln 3.5}{3 \ln 5} \right\}$   
  $\left\{ \frac{3 \ln 3.5}{\ln 5} \right\}$   
  $\left\{ \frac{\ln 3.5}{5 \ln 3} \right\}$   
  $\left\{ \frac{3.5 \ln 3}{\ln 5} \right\}$

**Question 10****5 points**[Save](#)

**Find the amount that results from the investment.**

\$14,000 invested at 12% compounded semiannually after a period of 7 years

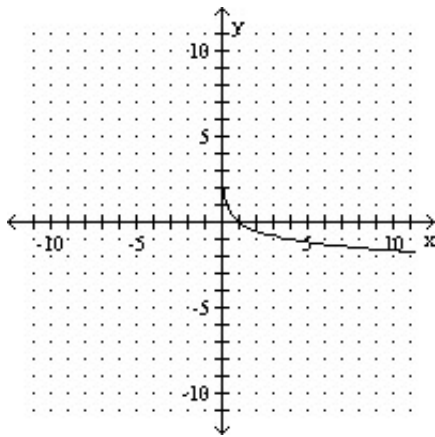
- \$17,652.66
- \$29,861.00
- \$31,652.66
- \$30,949.54

**Question 11**

**5 points**

[Save](#)

**The graph of a logarithmic function is shown. Select the function which matches the graph.**



- $f(x) = -\log_4 x$
- $f(x) = \log_4 x$
- $f(x) = \log_4(-x)$
- $f(x) = 1 - \log_4 x$

**Question 12**

**5 points**

[Save](#)

**Solve the problem.**

The Feldmans bought their first house for \$18,000. Over the years they moved three times into bigger and bigger houses. Now, 45 years later, they are ready to retire and want a smaller house like the first one they bought. If inflation in property values has averaged 3.2% per year during that time, how much will such a house cost them now? (Round your answer to the nearest dollar.)

- \$75,973
- \$4362
- \$74,278
- \$4265

**Question 13****5 points**[Save](#)**Solve the problem.**

A fossilized leaf contains 12% of its normal amount of carbon 14. How old is the fossil (to the nearest year)? Use 5600 years as the half-life of carbon 14.

- 1031
- 17,099
- 20,040
- 36,108

**Question 14****5 points**[Save](#)**Solve the problem.**

A grocery store normally sells 5 jars of caviar per week. Use the Poisson Distribution

$$P(x) = \frac{5^x e^{-5}}{x!}$$

to find the probability (to three decimals) of selling 3 jars in a week.

$$(x! = x \cdot (x - 1) \cdot (x - 2) \cdot \dots \cdot (3)(2)(1)).$$

- 0.281
- 0.14
- 0.421
- 0.094

**Question 15****5 points**[Save](#)**Find the amount that results from the investment.**

\$12,000 invested at 11% compounded quarterly after a period of 4 years

- \$18,522.11
- \$18,026.39
- \$6522.11
- \$18,216.84

**Question 16****5 points**[Save](#)**Find the present value. Round to the nearest cent.**

To get \$10,000 after 2 years at 18% compounded monthly

- \$5000.00
- \$6995.44
- \$8363.87
- \$11,956.18

**Question 17****5 points**[Save](#)

Find the domain of the composite function  $f \circ g$ .

$$f(x) = \sqrt{x}; g(x) = 4x + 12$$

- $\{x \mid x \leq -3 \text{ or } x \geq 0\}$
- $\{x \mid x \geq -3\}$
- $\{x \mid x \geq 0\}$
- $\{x \mid x \text{ is any real number}\}$

**Question 18****5 points**[Save](#)

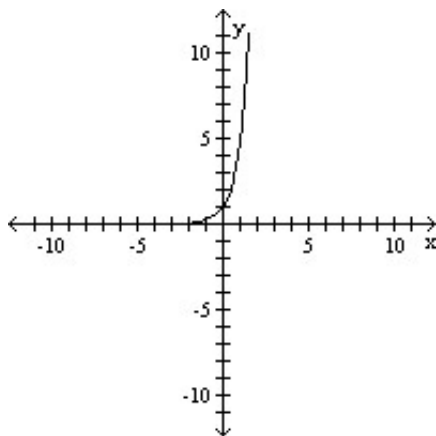
Find the amount that results from the investment.

\$480 invested at 16% compounded quarterly after a period of 4 years

- \$864.45
- \$419.03
- \$869.11
- \$899.03

**Question 19****5 points**[Save](#)

The graph of an exponential function is given. Match the graph to one of the following functions.



- $f(x) = 5^x + 1$
- $f(x) = 5^x$
- $f(x) = 5^{x+1}$
- $f(x) = 5^x - 1$

**Question 20****5 points**[Save](#)

Change the exponential expression to an equivalent expression involving a logarithm.

$$e^x = 25$$

- $\log_{25} x = e$
- $\log_x e = 25$
- $\ln x = 25$
- $\ln 25 = x$